

Problem solving with EYFS, Key Stage 1 and Key Stage 2 children

Logic problems and puzzles

Problem solving with EYFS, Key Stage 1 and Key Stage 2 children

Logic problems and puzzles

Disclaimer

The Department for Education wishes to make it clear that the Department and its agents accept no responsibility for the actual content of any materials suggested as information sources in this publication, whether these are in the form of printed publications or on a website.

In these materials, icons, logos, software products and websites are used for contextual and practical reasons. Their use should not be interpreted as an endorsement of particular companies or their products.

The websites referred to in these materials existed at the time of going to print.

Please check all website references carefully to see if they have changed and substitute other references where appropriate.

Contents

Introduction	3
Foundation Stage	
Activity 1: Different shoes	5
Activity 2: Nature sort	8
Year 1	
Lesson 1: Toys	11
Lesson 2: Granny's garden	17
Year 2	
Lesson 1: Shape puzzle	21
Lesson 2: Sally's super sandwich shop	26
Year 3	
Lesson 1: Coloured shapes	35
Lesson 2: Rebecca's favourite school day	41
Year 4	
Lesson 1: Shape puzzle	47
Lesson 2: Numbers of boys and girls	53
Year 5	
Lesson 1: Nicknames	59
Lesson 2: Tea for two	65
Year 6	
Lesson 1: Albert Square	72
Lesson 2: House points	80

Introduction

This resource focuses on problems that fall into the category 'Logic problems and puzzles'. To help children become good at solving logic problems and puzzles it is important that they are taught and acquire essential skills and strategies and understand how and when to use them.

When solving logic problems and puzzles, the strategies children need to be able to draw on include:

- Identifying carefully what is known and what needs to be found and thinking about how they might relate;
- Looking through the information that is given for any relationships or patterns that can be developed and used;
- Developing a line of thinking that involves making inferences and deductions, for example 'if I know that then this could or must be true', and testing these out against the given information;
- Taking one piece of the information and changing it, while keeping everything else fixed, to see what effect it has on the problem;
- Choosing a way of recording and organising the given information that helps to see how the problem is structured;
- Checking answers along the way to see if they satisfy the conditions or rules.

There are two lessons for each age group, and a selection of activities for the Early Years Foundation Stage. Progression has been built across the two lessons in each year group so that the work in the second lesson builds on the work in the first, and also there is progression across years.

You should adapt the problems for the needs of your children. For example, in the Year 2 problem involving Sally's super sandwich shop, you could: reduce the numbers of sandwiches involved; change 'double the number' to 'one more'; change the type of shop to involve fewer or more good and criteria to be met.

Throughout the lessons, there are notes to indicate particular features that you might want to consider or look out for when working with children, indicated by the following symbol:



Foundation Stage

Activity 1: Different shoes

Early Years Foundation Stage early learning goal

- Use developing mathematical ideas and methods to solve practical problems.

Primary Framework objectives

- Describe solutions to practical problems, drawing on experience, talking about their own ideas, methods and choices.
- Sort objects, making choices and justifying decisions.
- Use developing mathematical ideas and methods to solve practical problems.

By the end of this activity, children will be able to:

- recognise similarities and differences;
- sort objects using several criteria and sort to their own criteria, justifying their choices;
- explain what they are thinking and doing.

Vocabulary

same different sort

Necessary prior knowledge

- Colour and pattern recognition.
- Language of similarity and difference.

Resources

- A collection of different types of shoes.



Whole-group or small-group activity

What's your shoe?

Share stories with the children that refer to shoes, e.g. *Cinderella*, *The Elves and the Shoemaker*. Using your collection of shoes, draw out the different types of shoes, colours and fastenings that you could have, e.g. boots, sandals, trainers, slip-ons, laces, hook-and-loop tape, and buckles. You may want to give the children a shoe to talk about in pairs.

- Q.** Who has got a shoe that is blue?
- Q.** Who has got a shoe with a buckle?

Encourage the children to describe the shoes that they are wearing. Develop sorting activities with the whole group or small group, e.g. 'If you have laces, stand up.' 'If you have black shoes, stand up.' 'If you have black shoes and laces, stay standing.' Encourage the children to check that their shoes do fit the criteria.



Encourage the children to use these criteria.
This 'sophisticated sorting' is very helpful in solving logic problems.
Children need to understand that problem solving involves choices, so they have the opportunity to make decisions and justify them.

Missing shoes

The scenario is that you have chosen a pair of shoes but unfortunately someone has mixed all the shoes into a large pile. 'I have a problem. I have brought a pair of shoes but someone has mixed all the shoes up. Can you be shoe detectives and help me find my shoes?'

- Q.** How could we find my pair of missing shoes?
- Q.** What sort of shoe do you think I might have chosen?
- Q.** What type of shoe might I choose if I was going to the beach/for a walk in the woods/to a party?
Say that you will give clues about your shoes.

Say that you will give clues about your shoes.

- Q.** My shoes have laces. What shall we do?
Agree that you will put all the shoes with laces to one side.
- Q.** My shoes are white; what shall we do now?
- Q.** Are all the shoes we sorted white and do they all have laces?



How did the children tackle the problem?
Did they understand the problem? Were they able to talk to others?

Take a white shoe without laces.

- Q.** This shoe is white. Why can't it be this one?



Here we are ensuring that children understand that the shoes meet two criteria.

Continue to give descriptions of your shoes so that they find the right pair.

Q. What did you find out about my shoes?

Encourage the children to recall the different criteria you gave them.

‘Yes, my shoes were white with laces and they were trainers. Well done, you solved the problem.’

Develop the activity further where the children are encouraged to choose a pair of shoes from a collection and give clues to the other children, so that they find the right pair of shoes. You could build on this activity and encourage the children to ask questions to try and find out what shoe has been chosen, e.g. ‘Is the shoe black? Does it have a buckle?’

Q. What questions helped us work out what the shoe was?

Point out to the children which questions helped them to make the right choice, and those that didn’t help.

You could also encourage the children to sort the coins in the till in role-play, or to sort cutlery, plates, cups or collections of teddies. Link to other sorting activities that will be happening in different contexts and other areas of learning. Have a collection of different sized parcels in similar and different types of wrapping paper for the children to sort and discuss. ‘Can you find the parcel that is red and spotty?’ ‘Can you find all the small green parcels?’ Encourage the children to choose a parcel and describe it.

If you have the use of an interactive whiteboard, you may want to create a screen with a collection of objects and sorting boxes into which the objects can be dragged and dropped.

Foundation Stage

Activity 2: Nature sort

Early Years Foundation Stage early learning goal

- Use developing mathematical ideas and methods to solve practical problems.

Primary Framework objectives

- Describe solutions to practical problems, drawing on experience, talking about their own ideas, methods and choices.
- Sort objects, making choices and justifying decisions.
- Use developing mathematical ideas and methods to solve practical problems.

By the end of this activity, children will be able to:

- recognise similarities and differences;
- guess the criteria being used to sort objects;
- make and test hypotheses.

Vocabulary

same different sort


vocabulary linked to knowledge and understanding of the world

Necessary prior knowledge

- Colour and pattern recognition.
- Language of similarity and difference.
- Opportunities to discuss and explore different natural and manufactured materials.

Resources

- Collections of different objects, both natural and manufactured, e.g. toys, toy vehicles.
- Two hoops and/or yes/no or ✓/X, ☺/☹ cards.



Environmental activity (large or small group)

It would be useful to take the children on a walk, either around the school grounds or within the local environment, in preparation for the class-based activity. Encourage the children to describe what they see.

Look at this tree trunk.

- Q. Do you think it is hard/soft/smooth/rough/shiny?
- Q. Can you see something else that is brown/hard/soft/smooth/rough/shiny?

Encourage the children to record different objects they see, which can be used as a discussion point back in the classroom.

- Q. Did we see any things that were the same colour?
- Q. How many did we see that were the same?
- Q. Did we find anything that was brown and rough?

Suggested supportive activities

Have a class collection of different types of materials for the children to explore, discuss and sort.

Create opportunities to produce drawings, paintings, rubbings and collages of objects sorted to a given criterion.

Have a collection of different sized parcels in similar and different types of wrapping paper for the children to sort and discuss. 'Can you find the parcel that is red and spotty? Can you find all the small green parcels?' Encourage the children to choose a parcel and describe it.

If you have a digital camera you could photograph the different objects the children see to record their findings. This could be made into a class book.

Feely bag

Explain to the children that there is a mystery object in the bag and that they are going to work out what it is. Display a range of objects including a duplicate of the object in the bag as a visual prompt. Ask a child to come forward and feel the object in the bag. They should describe it to the other children, using a range of vocabulary.

- Q. How could we find out what is in the bag without looking?
- Q. Can you describe how it feels?
- Q. Can we see which object it might be? Is there anything else that is soft? Which objects can't it be?
- Q. Can it be the pencil? Why not?



Encourage the children to share ideas with a partner. Involve the children in sustained shared thinking.

Remove to one side the displayed items that are excluded, to help the children to make more informed choices. Continue with the questioning until the right object has been guessed.

Pick out the descriptions that helped the children to work out what the object was.



Perseverance and persistence are important problem-solving skills.

You may wish to repeat the activity with the children asking questions to find out what is inside the bag.

Guess the collection

Tell the children a story about how a magpie likes to collect objects and put them in its nest. Get the children to share their ideas of what might be the same about all the things the magpie has collected.

You could use a puppet or soft toy to act as the magpie.

Explain that the magpie wants to make a collection of objects but you are not sure what it wants.

- Q.** What sort of things do you think a magpie might want to collect?
- Q.** How could we find out what it wants to collect?

Explain that the children are going to choose an object and ask the magpie (puppet) whether it wants it in the collection. Place the two hoops down and explain that one hoop will be for the items the magpie wants and the other hoop is for the items it doesn't want. Label each hoop yes/no or ✓/✗ or ☺/☹. Ask a child to choose an item and ask the magpie whether it would like the item.

- Q.** What do you think the magpie wants to collect?
'It wanted the spoon but not the pencil.'
- Q.** Can we find anything else that it might like? How are they the same?
- Q.** Do you think the magpie would like the silver tray?
- Q.** Why do you think that?
- Q.** Would it like the book?
- Q.** Why do you think that?



How did the children tackle the problem? Did they understand the problem? Did they begin to make connections between the objects that had been accepted by the puppet? Are they spotting common characteristics?

Continue the activity with the children selecting items and the magpie indicating whether it wants it (if it is shiny) or not.



This is encouraging children to develop early problem-solving skills of trial and improvement.

- Q.** Can we see anything that is the same about all the items in the collection?
- Q.** Can we guess what the magpie likes collecting? How do you know it likes collecting that?
- Q.** Is everything in the collection shiny?
- Q.** Can you think of something else around the class that we could put into the magpie's hoop?
- Q.** Why does that go in the hoop?

The activity could be repeated with the children choosing the criterion for the puppet. You could provide materials for the children to record their findings or photograph the findings.

Year 1

Lesson 1: Toys

Primary Framework objective

- Describe simple patterns and relationships involving numbers or shapes; decide whether examples satisfy given conditions.

By the end of this lesson, children will be able to:

- solve a problem using given facts;
- use one piece of information and see what effect it has;
- check that the answer meets all of the criteria.

Vocabulary

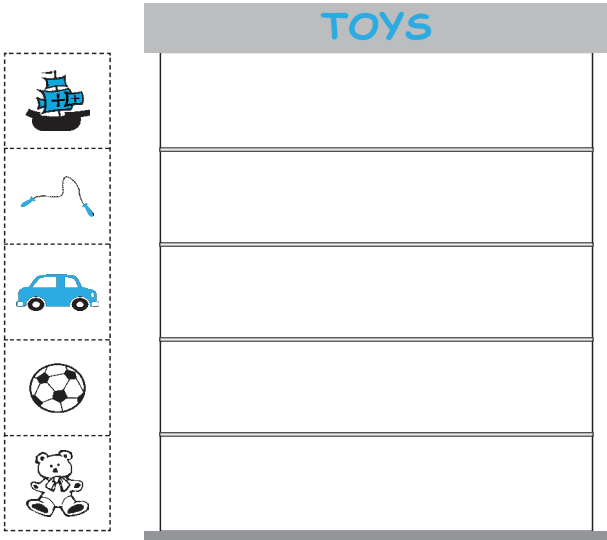
next to top bottom behind between above first in front last

Necessary prior knowledge

- Positional language such as before, after, next to, first, second, etc.
- Experience of working collaboratively in small groups.

Resources

- Resource sheet 1
- Resource sheets 2a and 2b
- Real toys or clip art of toys to show on an interactive whiteboard
- Model shelf (e.g. stack of boxes, class shelving).



TOYS

1. The boat is on the middle shelf.
2. The skipping rope is on the top shelf.
3. The car is on the bottom shelf.
4. The ball is next to the boat.
5. The teddy is in between the boat and the car.

Main teaching activity

Use real toys and a stack of five boxes piled on top of each other to introduce the problem of placing the toys on the shelves on Resource sheet 1.

A story could provide a good context.

The 'shelf' could contain objects relevant to any topic, e.g. sea creatures, transport.

Q. Where do you think each toy should go? Why do you think that?

Explain that the toys must be put in special places and that you have some clues to help them work out where each toy must go.

Introduce the clue cards from Resource sheet 1 one at a time:

Using given facts in order to solve a problem is a key skill in solving logic problems. This activity introduces the concept as 'giving clues'.

Read card 1, 'The boat is on the middle shelf.'

Q. What is the helpful word in this clue card?

Draw out the positional word 'middle'.

Invite a child to use the clue to place the boat in the correct place. Continue through clues 2 and 3.

Read card 4, 'The ball is next to the boat.'

Q. What are the helpful words on this card?

Draw out the words 'next to'.

Q. Is there more than one place that the ball could go?

Model the trial and improvement process by placing the ball in one of the possible places and then explain that the next clues might help to find the final place.

When looking at card 5, 'The teddy is in between the car and the boat', demonstrate how that clue helps to locate the position of the teddy and also the ball.

Q. Did we need all of the clues?

Q. What would happen if you lost one of the clues?

Model the checking process by going through each clue card and checking that the position of the toys meets the criteria on the cards.

Pose some more questions to reinforce the positional vocabulary, e.g.

Q. What is in between the skipping rope and the boat? Is it the only toy?

Display the key positional vocabulary on the board for the children to refer to later.

Split the class into mixed-ability groups of five. Each group will need a blank bus queue, five character cards and five clue cards from Resource sheet 2. Explain that they will now have a similar problem to solve as a group, using clues to place the characters in the correct place in a bus queue. Each child in the group will have one clue each. They will be expected to contribute their clue to the group to help solve the problem. Ask the children to read their clues in pairs and to discuss what information it gives them, but not to place any characters at the moment.



How is the mixed-ability group work supporting the children?

Drawing together

Draw the class together in order to reflect on the effect of different clues.

- Q.** How is your clue helpful?
- Q.** Could you place a character using your clue?
- Q.** Why can't you put Billy Goat into the queue straight away?



Pursue the conversation to assess children's understanding, using questions such as 'How do you know that?' 'Why do you think that?'

Remind the class to take turns to listen to each clue in turn in order to solve the group problem.

Plenary

Use a large version of the characters, the queue and the clues to review children's solutions to the problem and check the final solution against the clues.








Children need to be encouraged to make up their own 'What if . . . ?' questions as part of the development of their reasoning skills.

Introduce a new character, Mr Wolf, who joins the queue somewhere in the middle (see Resource sheet 2b).


- Q.** If the wolf stands here in the queue, then which clues are still true and which are now false?
- Q.** If the wolf stands here, then where are the characters standing now?

Invite the children to offer alternative changes to the queue and suggest how the clues change, e.g. if another little pig joins the end of the queue then Red Riding Hood isn't at the end any more.


Year 1, Lesson 1: resource sheet 1




TOYS





1. The boat is on the middle shelf.






2. The skipping rope is on the top shelf.



3. The car is on the bottom shelf.




4. The ball is next to the boat.

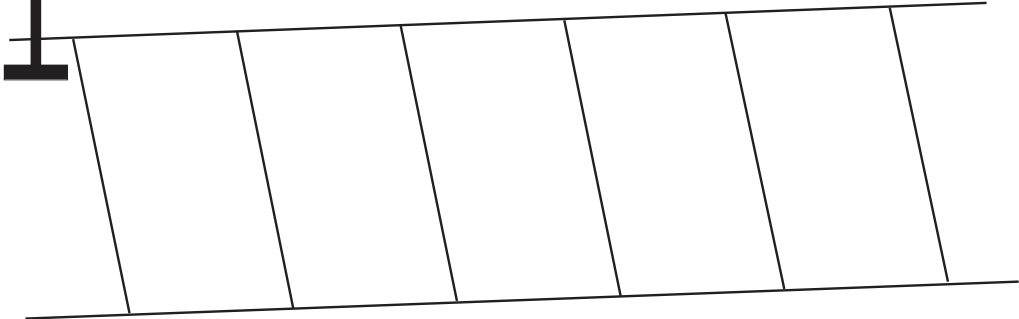







5. The teddy is in between the boat and the car.








Year 1, Lesson 1: resource sheet 2a



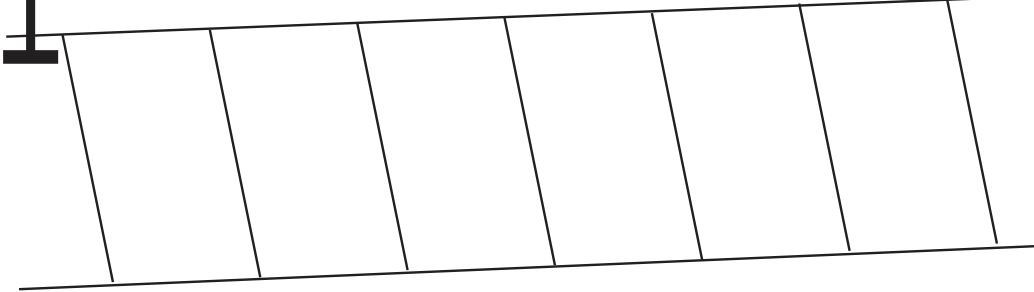

Bus Stop
















				
Little Red Riding Hood	Little Pig	Billy Goat	Daddy Bear	Gingerbread Boy

1.  Little Red Riding Hood is last in the queue.
2.  Billy Goat is next to  Daddy Bear.
3.  Gingerbread Boy is first in the queue.
4.  Little Pig is behind  Gingerbread Boy.
5.  Daddy Bear is in the middle of the queue.

Year 1, Lesson 1: resource sheet 2b



 Little Red Riding Hood	 Little Pig	 Billy Goat	 Daddy Bear	 Gingerbread Boy	 Mr Wolf
---	---	---	---	---	--

1.  Little Red Riding Hood is last in the queue.
2.  Billy Goat is next to  Daddy Bear.
3.  Gingerbread Boy is first in the queue.
4.  Little Pig is behind  Gingerbread Boy.
5.  Daddy Bear is in the middle of the queue.

Year 1

Lesson 2: Granny's garden

Primary Framework objective

- Describe simple patterns and relationships involving numbers or shapes; decide whether examples satisfy given conditions.

By the end of this lesson, children will be able to:

- solve a problem using given facts;
- use one piece of information and see what effect it has;
- check that the answer meets all of the criteria.

Vocabulary

next between above top bottom first last in front behind circle
 square triangle








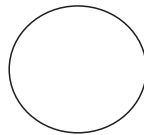
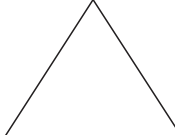

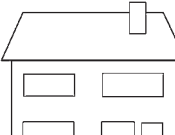
Necessary prior knowledge

- Positional language such as next to, in between.
- 2D shape recognition.
- Experience of using clues to help solve problems.

Resources

- Resource sheet 1
- A selection of vegetables or clip art of vegetables on an interactive whiteboard.

Granny's garden

		 carrots  peas  potatoes  cabbages  beans
		
		

1. Granny grew carrots in a triangle.
2. Granny grew peas in a square.
3. Granny grew potatoes in a circle.
4. Granny grew cabbages next to her house.
5. Granny grew beans in an oblong.

Main teaching activity

Introduce the problem using a large version of the garden from Resource sheet 3 and the selection of vegetables. Explain that the task is to place the vegetables in the correct places in the garden.

Q. What will you need in order to help you to work out where each vegetable will go?

Remind the class that in the last lesson they used clues in order to solve the problem.

Q. What did the clues do?

Q. How were some clues more helpful than others?

Q. Were all of the clues important? Why?

Ask children to work in pairs to look at the clues and decide which vegetables they can place straight away. They should sort them into two piles: those vegetables which can be placed straight away and those which have more than one possible place.

Allow several minutes for independent work.



Paired work gives more opportunity for children to develop their reasoning and communication skills.

You might want to link the problem with work on *The Enormous Turnip*. Alternative contexts might be to use different types of counters or cars in a car park.

Drawing together

Q. Which vegetables can you place straight away? Why?

Q. Which clues need some more information?

Q. Can you pair any clues together?

Q. Which clue do you need to save until last?

Respond to any difficulties or misconceptions observed as the children worked independently, e.g. if assumptions were made about the position of the peas.

Ask children to continue working in pairs to solve the problem.

Drawing together

Ask children to share their solutions with another pair.

Q. What will you do if you have different answers?

Q. How will you know that you are right?

Encourage children to check their solution against the clues. Allow a further few minutes for discussion of solutions between partners.



Checking against the given information and justifying decisions is an important skill, which needs modelling at this age.

Plenary

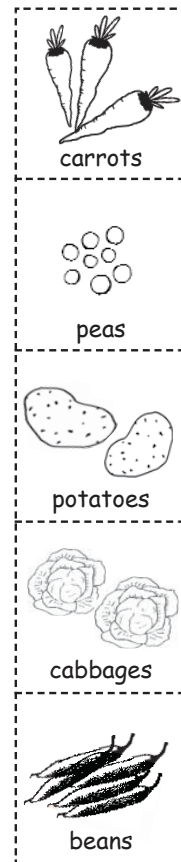
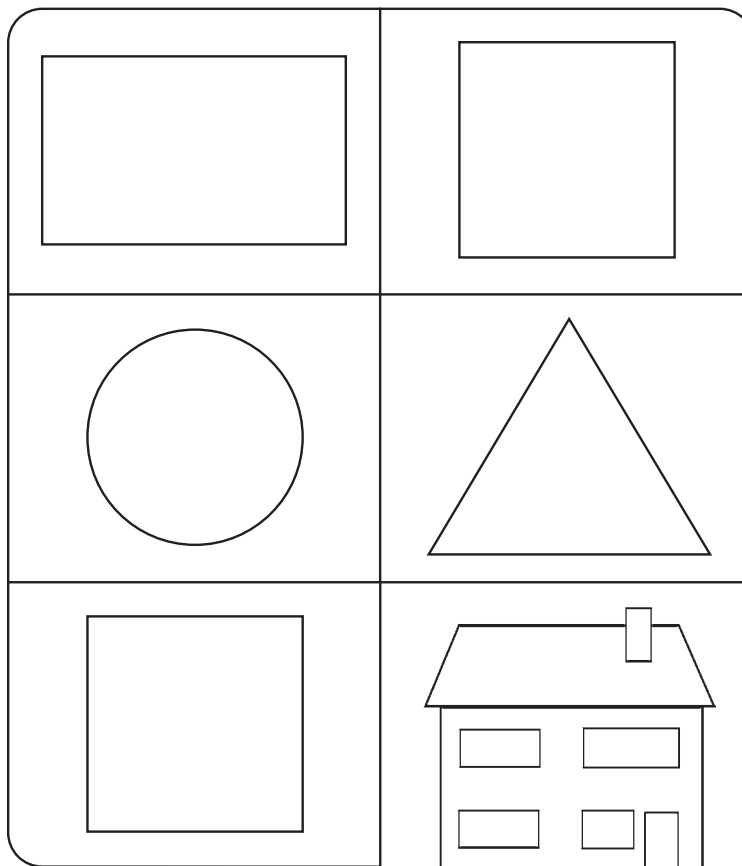
Draw the class together in order to check the solution against the clues.

- Q.** Which clue was the most helpful?
- Q.** Why couldn't you place the cabbages or peas straight away?
- Q.** What did you do?
- Q.** Which clue helped you to place the peas?

Move the vegetables into different positions. Invite children to verbally offer their own clues to describe where the vegetables are now placed. Write these on the board and then check the position of the vegetables against them.

Year 1, Lesson 2: resource sheet

Granny's garden



1. Granny grew carrots in a triangle.

2. Granny grew peas in a square.

3. Granny grew potatoes in a circle.

4. Granny grew cabbages next to her house.

5. Granny grew beans in an oblong.

Year 2

Lesson 1: Shape puzzle

Primary Framework objectives

- Describe patterns and relationships involving numbers or shapes, make predictions and test these with examples.
- Identify and record the information or calculation needed to solve a puzzle or problem; carry out the steps or calculations and check the solution in the context of the problem.

By the end of this lesson, children will be able to:

- solve a problem by identifying given facts and prioritising them;
- confirm that they have found the correct solution by checking in another way.

Vocabulary

sum add total row column double halve

Necessary prior knowledge

- Add and subtract mentally.
- Number bonds for numbers up to 20.
- Recognise the use of a symbol to stand for an unknown number.

Resources










- Resource sheet 1
- Resource sheet 2.

Shape puzzle

Each shape stands for a number.

The numbers shown are the totals of the line of three numbers in the row or column.

Find out which number each symbol represents and find the other totals.

			12
			14
			
20	6		

 =

 =

 =

Main teaching activity

Write the number sentence $10 + \square = 20$ on the board. Read it together, saying: '10 plus something equals 20.' Ask the children to work in pairs to complete the number sentence on whiteboards.

Q. How did you work it out?

Some children will know this as a double and others may have counted on from 10.



This activity is preparing children for the main problem.

Repeat with other problems, e.g.

$$2 + 2 + 1 = \square$$

$$\square + \square + \square = 15$$

$$\heartsuit + \triangle = 10$$

If children find it difficult to understand the idea of a symbol representing a number, write the complete number sentences and cover numbers with shapes instead. Say that if there are three squares, the numbers underneath them are the same.

Q. How is this last one different?

Draw out that the symbols are different and so the numbers are different.

Q. Can we work out the answer? What could \triangle be?

So what could \heartsuit be?

Are there any other possibilities?



Ensure that children are using the mental strategy of looking for pairs of numbers that total 10.

Write: $\triangle + \triangle = 8$

Q. What is \triangle ? If \triangle is the same number in $\heartsuit + \triangle = 10$, what is \heartsuit ?

Show Resource sheet 1 and explain that each symbol represents a number and they have to find out what the numbers are.

Ask children to discuss in pairs how they might start to solve the problem.



Allow some time for children to 'get their heads around the problem'.

Drawing together

Q. Which is the most important row or column? Why?

Agree that the column with the three triangles is the most important because it includes only one shape and the total was given and so we can find out what the triangle represents.



Prioritising information is an important skill when solving logic problems.

Write: $\triangle + \triangle + \triangle = 6$ and ask the children to work out what the triangle represents. Agree that it is 2.

Q. Which column or row should we try next? Why?

Agree that either the top row or the second row could be done next because in each the total is given and we know what the triangle represents.

Work through row 1. Write:

$$\heartsuit + \triangle + \heartsuit = 12$$

Q. What is \triangle ?

Q. So if two hearts and a triangle make 12, what do two hearts make?

Write: $\heartsuit + \heartsuit = 10$

Agree that two hearts make 10, so one heart must be half of 10.

Q. So what does the heart represent? (5)

Q. Which row or column could help us to find the pentagon?

Q. Which row or column could you use to check the pentagon?

Agree that they could use column 1 or row 2 to find the pentagon and use the other to check.

Ask the children to find the pentagon and then to complete the missing totals.

If some children finish this quickly then set them the following problem:

Add one shape to each row so that each row has a different total, less than 25. Use each shape once. Establish that we now know what all the symbols represent and so the whole problem can be completed. Ask the children to complete the grid.

Plenary

Q. What information helped you to solve the problem?

Ask the children to discuss this in pairs.

Establish that the problem gave:

1. the total of three triangles so we could work out the triangle;
2. the total of only triangles and a pentagon so we could work out the pentagon;
3. the total of only hearts and a triangle so we could work out the heart;
4. the total of only hearts and a pentagon which we could use as a check.

Q. Could we have solved this problem without the total of three triangles?

Q. Did it matter whether we found the heart or the pentagon next?

Q. Did we need the other three clues?

Agree that we needed only the first three clues, but the fourth total was useful as a check.

Display the Shape Puzzle on Resource sheet 2 but cover the second and third cells in the third row.

Q. Which shape should we work out first?

Q. What does a square represent? (10)

Ask the children to discuss in pairs which shape they should find next and which row or column is helpful.



It is helpful for children to see another example so that they can put into practice what they have learned.

Agree that the first row and column will help them to work out the circle and triangle.

Ask the children to do this and then to discuss in pairs which shapes are hidden by the counters.

Q. How did you know?

Conclude the lesson by saying that sometimes we are given lots of information and the most important part of the problem is deciding which information is most important so that we know where to start.










Year 2, Lesson 1: resource sheet 1

Shape puzzle

Each shape stands for a number.

The numbers shown are the totals of the line of three numbers in the row or column.

Find out which number each symbol represents and find the other totals.

			<div>12</div>
			<div>14</div>
			<div></div>
<div>20</div>	<div>6</div>	<div></div>	










 =

 =

 =

Year 2, Lesson 1: resource sheet 2

Shape puzzle

			<div>14</div>
			<div>30</div>
			<div>4</div>
<div>21</div>	<div>13</div>	<div>14</div>	

Year 2

Lesson 2: Sally's super sandwich shop

Primary Framework objectives

- Describe patterns and relationships involving numbers or shapes, make predictions and test these with examples.
- Follow a line of enquiry; answer questions by choosing and using suitable equipment and selecting, organising and presenting information in lists, tables and simple diagrams.

By the end of this lesson, children will be able to:

- solve a problem by identifying given facts and prioritising them;
- use recording to help them make sense of the information given and to find missing information.

Vocabulary

total table number sentence

Necessary prior knowledge

- Add and subtract mentally.
- Pairs of numbers which equal 20.

Resources

- Resource sheet 1
- Resource sheet 2.

Sally's super sandwich shop

Sally runs a sandwich shop.

She gets a very muddled order for lunchtime sandwiches from the office next door.

Can you sort it out using the clues?

How many of each sandwich must Sally make for the office?

Sandwiches can be brown bread or white bread.

They can be cheese or salad.

We need 6 white bread sandwiches

We need 2 white bread sandwiches with cheese

We need 9 cheese sandwiches

We need double the number of brown bread salad sandwiches as white bread salad

Main teaching activity

Remind children that in the previous lesson we used shapes to stand for mystery numbers.

Write the following problem on the board:

I have 20 apples. Six apples are red. How many are green?

Q. Could we write this in a number sentence? Could we use symbols or shapes to help?

Ask children to discuss this in pairs and record their number sentences on their whiteboards.

Ask a child who has used a symbol or empty box to explain the recording.

$$6 + \square = 20$$

$$6 + 14 = 20$$

I had 14 green apples.

If no one used empty boxes ask a child to explain how they worked it out and model this using the empty box number sentences.



This work is providing children with one strategy to solve the lesson's main problem.

Write the following problem on the board. Ask children to work in pairs and to record a number sentence.

I have 16 pens. Some are red and some are blue.

I have 9 red pens. How many blue pens are there?

Ask a child who recorded using an empty box to share this with the class.

$$9 + \square = 16$$

$$9 + 7 = 16$$

I had 7 blue pens.

Write the following problem on the board. Ask children to discuss how they might work this out.



Are more children able to write this as an empty box problem?

I have 24 cars. Some are large and some are small.

I have an equal number of large and small cars.

How many large cars are there?

Q. Which word in the problem is a key piece of information?

Agree that the word 'equal' was the key word and this means that the number of large cars is the same as the number of small cars. Ask children if they can record this as a number sentence.

$$\square + \square = 24$$

Q. How can we work out what \square is?

Agree that we can halve 24.

Main teaching activity

Display 'Sally's Super Sandwich Shop' and read it together.

- Q.** What are the important parts of the problem?
- Q.** What are we asked to find out?



While the children are working, look for the different ways in which children make a start to this problem.

Ask children to talk about this in pairs.

Ask some children to come and highlight key words on the Sandwich Shop problem such as 'how many', 'brown bread', 'white bread' and 'cheese or salad'.

- Q.** How many different sorts of sandwich are there?

Agree that there are four.



Providing the children can read the clues, this activity may work well in mixed-ability groups.

Tell the children that they will work in groups of four to solve the problem. Show the children the clue cards on Resource sheet 3 and read them through together. Tell them that each child will have a clue card to read to their group. If the group has five children, one child will record the work.

Show the children Resource sheet 2 and read this together. Explain that they should record their solution to the problem on this sheet.



Let the children have time to make a start on the problem and begin to complete some of Resource sheet 2.

Ask the children to work in their groups to solve the problem. Remind them of the previous lesson where we solved a problem and how we looked for a starting point to help us start the problem. We did not just guess the numbers but worked them out from the information we had. You may want to provide practical resources such as toy sandwiches to support this activity.

Drawing together

After the children have made a start on the problem, draw them together to discuss their strategies.

- Q.** Which of the items on the list can we complete straight away?

Ask the children who have the relevant clue to show and read it. Establish that we know that the office needs two white bread sandwiches with cheese. Say that we can fill this in on Sally's list.

- Q.** How many white bread sandwiches does the office need?

Ask the children who have the relevant clue to hold it up.

Establish that we know that the office needs six white bread sandwiches.



Did the children realise that it was important to prioritise the clues and that some clues gave answers which are needed to complete other answers?

Q. What can we work out from these two pieces of information?

Establish that the total of white bread sandwiches is six. Write: $2 + \square = 6$. Agree that therefore there must be four white bread salad sandwiches because $2 + 4 = 6$.

Q. What kind of sandwiches do we need to find out about next?

Establish that we have found out all the white bread sandwiches and now we need to work out the brown bread sandwiches.

Ask the children to look at the two remaining clues to find out how many of each brown bread sandwich are needed, remembering to use the information they already have.

If children are finding it difficult to remember the four sorts of sandwich, show them how to record the information using a table:

	Cheese	Salad	Total
White	2	?	6
Brown	?	?	?
Total	9	?	?

Drawing together

Q. How do you know how many brown bread cheese sandwiches are needed? Which clue helped you find this out?

Ask the children who had this clue to show it and read it. Ascertain that we know there are nine cheese sandwiches needed and there were two white bread sandwiches needed, therefore $2 + \square = 9$. There are seven brown bread cheese sandwiches needed.



Encourage the use of number sentences when giving explanations.

Q. Which clue helped you find out the total of brown bread salad sandwiches needed?

Agree that the last clue did.

Q. Which other information did you use?

Agree that we needed to use the total of white bread salad sandwiches to work this out.

Reveal the top part and ask the children to help you to fill in each part. Point out how this is similar to the shape puzzle in the previous lesson.

	Cheese	Salad	Total
White bread	2	4	6
Brown bread	7	8	15
Total	9	12	21 altogether

Rub out the numbers. Read the lower part and ask which numbers you can put in straight away. Ask the children to work out the remaining information and to record it on Resource sheet 2.

Plenary

Q. Think about the information you used to solve the problems. Was it all in the clues?

Establish that some information was gained as we solved the problem. One piece of information helped us with the next part of the problem.

Q. How was this problem similar to the shape puzzle?

Point out how we had to read through the clues and decide where to start, just as in the previous lesson.



Ensure that children realise that, although one problem was a diagram puzzle and one looked more like a word problem, both necessitated prioritising information so that we could start.

Say that in today's lesson we have used number sentences and a table to record our information and to help us work out the missing information. Ask the children to discuss which they found most helpful. Explain that some form of recording can often help us to solve problems by making the information clearer and easier to use.

Year 2

Lesson 2: resource sheet 1

Sally's super sandwich shop

Sally runs a sandwich shop.

She gets a very muddled order for lunchtime sandwiches from the office next door.

Can you sort it out using the clues?

How many of each sandwich must Sally make for the office?

Sandwiches can be brown bread or white bread.

They can be cheese or salad.

Year 2, Lesson 2: resource sheet 2

Sally's super sandwich shop

	Cheese	Salad	Total
White bread			
Brown bread			
Total			

The next day, the office asks for:

- 10 brown sandwiches;
- 6 cheese sandwiches;
- 5 cheese sandwiches on brown bread;
- Twice as many salad sandwiches as cheese sandwiches.

Year 2, Lesson 2: resource sheet 3

Cut out a set of the following clues for each group of children.

Enlarge one set and cut out for the teacher to use.

We need 6 white bread sandwiches

We need 2 white bread sandwiches with cheese

We need 9 cheese sandwiches

We need double the number of brown bread salad sandwiches as white bread salad

Year 2, Lesson 2: resource sheet 4

You will need one A3 copy for the teacher and one A3 copy for each group.

Sally's super sandwich shop

Sally makes a list.

	Day one	Day two
Number of white bread sandwiches with cheese		
Number of white bread sandwiches with salad		
Total white bread sandwiches		
Number of brown bread sandwiches with cheese		
Number of brown bread sandwiches with salad		
Total brown bread sandwiches		
Total number of sandwiches		

Year 3

Lesson 1: Coloured shapes

Primary Framework objective

- Identify patterns and relationships involving numbers or shapes, and use these to solve problems.

By the end of this lesson, children will be able to:

- solve a puzzle by identifying the facts and prioritising them;
- use one piece of information in the problem and see what effect it has;
- check that their solution meets all the criteria.

Vocabulary

position right next to left beside check above facts below clues

Necessary prior knowledge


- Positional language.
- Experience of using clues to help solve problems.

Resources

- Resource sheet 1
- Resource sheet 2
- Resource sheet 3.

Coloured shapes

What colour is each shape?
Write it on the shape.



Clues

- ◆ Red is not next to grey.
- ◆ Blue is between white and grey.
- ◆ Green is not a square.
- ◆ Blue is on the right of pink.

Main activity

Explain to the children that they are going to solve a puzzle and that they are going to have some clues to help them.

Show the Shape Puzzle on your interactive whiteboard.

- Q.** Can you explain to a partner what you need to do?
- Q.** What have you got to find out?
- Q.** Where are you going to start?
- Q.** Why do you think that?
- Q.** What do you know?



Allow enough time for children to talk about their ideas.

Ask children to share their responses to the above questions with a partner, explaining their reasoning, before taking feedback.

Give out Resource sheet 1. Ask children to work in pairs and to begin working on the puzzle. Say that children can cut out the words to help them begin to solve the problem.

You could also provide practical resources or images on an interactive whiteboard for individual or groups of children to use to test out their ideas.

Drawing together

When the children have worked on the problem, stop them to ask them their strategies.

- Q.** Which clues gave you a good place to start?
- Q.** What do we know about the position of blue? (It is between white and grey and on the right of pink.)

Agree that two clues tell us about the blue shape and if we put them together we know it is in the middle row on the right.

Discuss what this tells us, and how we can work out which shape is blue.

- Q.** What other colour do we now know?

Draw out that we will need to check this, as one piece of information affects another.

- Q.** What do you know about the green shape?

At this point establish that an '... is not ...' clue can give information and that 'Green is not a square' tells us that it must be a circle.

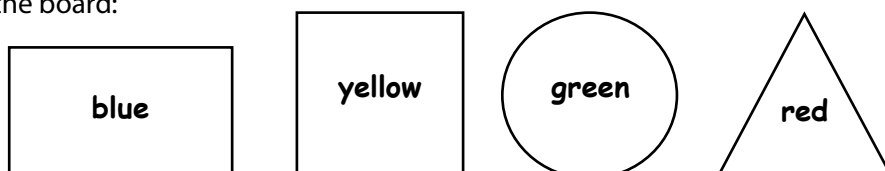
Ask children to continue with solving the rest of the puzzle.

- Q.** Is your solution the same as that of another pair on your table?

Drawing together

Share the solution and point out how using some clues enabled us to use other clues to place the remaining colours.

Draw the following shapes on the board:



- Q. What clues would you write to help someone to solve this puzzle?
- Q. Could you think of a '... is not ...' clue that gives us useful information?

Ask the children to discuss this in pairs, jotting down one or two clues to try out.



Follow their conversations to assess children's understanding, using questions such as 'How does this clue affect another clue?' 'Why do you think that?'

Record some suggestions from the children and discuss how much information these give.

- Q. Is there a clue that would be a good one to start with? Why?

Explain to the children that they are to use these four shapes and colours to create their own puzzle. They should use the same arrangement of shapes, but choose their own colours.

Ask children to write enough clue cards to make sure that someone else could use to completely solve their puzzle.

Drawing together

- Q. What is the smallest number of clues you need to solve the puzzle?
- Q. What if we could only use three clues – what might they be?



'What if . . . ?' questions provide useful extensions to problems.

Establish that the puzzle could be solved using only three clues, but that there are lots of possible clues that could be written.

Ask children to choose three clues that someone else could use to completely solve their puzzle.

Plenary

Select and record examples of children's clue statements on the board.

Use these to develop children's evaluation of each other's work by asking children to try out other children's clues and asking questions such as:

- Q. Which clues should we use first?
- Q. How helpful is this clue? Does it work?
- Q. Is this a good clue for helping us to solve the puzzle? Why is that so?
- Q. Could you change it to make it better? How would you do that?
- Q. What difference does this make to the problem?
- Q. Could we solve this problem using only two clues? If so, how might we use the other clues?

Agree that we can use them to check our solution.




Children evaluating each other's work will give them opportunities for self-assessment.

Ask children to reflect on how they solved the puzzles in this lesson. Draw out that, once they had read the clues, they didn't work through them in order but selected which ones were most useful to use first. Placing some colours enabled them to then use the other clues to solve the problem. Point out the importance of checking the solution against the clues to check that it meets all the criteria.

Year 3, Lesson 1: resource sheet 1

Coloured shapes

What colour is each shape?
Write it on the shape.




Clues

- ◆ Red is not next to grey.
- ◆ Blue is between white and grey.
- ◆ Green is not a square.
- ◆ Blue is on the right of pink.

Year 3, Lesson 1: resource sheet 2

Coloured shapes

What colour is each shape?
Write it on the shape.



Clues

- ◆ Red is not next to grey.
- ◆ Blue is between white and grey.
- ◆ Green is not a square.
- ◆ Blue is on the right of pink.

Red	White	Grey
Blue	Pink	Green

Year 3, Lesson 1: resource sheet 3

..... is not a triangle.

..... is on the right of

..... is above

..... is not a circle.

Year 3

Lesson 2: Rebecca's favourite school day

Primary Framework objective

- Identify patterns and relationships involving numbers or shapes, and use these to solve problems.

By the end of this lesson, children will be able to:

- solve a puzzle by identifying the facts and prioritising them;
- use one piece of information in the problem and see what effect it has;
- check that their solution meets all the criteria.

Vocabulary

timetable clue

Necessary prior knowledge

- Reading simple timetables.
- Using clues to solve problems.

Resources

- IWB version of Rebecca's favourite school day problem sheet
- Resource sheet 1
- Resource sheet 2.

Rebecca's favourite school day

Monday	Maths	Literacy	Lunchtime	Science	ICT in the ICT room
Tuesday	Science	Literacy		Maths	Art
Wednesday	Literacy	Maths		Swimming	History
Thursday	RE	PE		Literacy	Music
Friday	Literacy	Maths		Geography in Mr Singh's room	PE

Rebecca's clues

- ◆ Maths is her favourite subject.
- ◆ She prefers to do maths in the morning.
- ◆ She doesn't like PE other than swimming.
- ◆ She prefers to be in her own classroom at the end of the day.

Main teaching activity

Ensure that children are familiar with timetables, for example their own class timetable. Show Rebecca's favourite school day problem and agree that this is a class timetable.

- Q. What lesson is first on Monday?
- Q. Which lessons are mainly in the mornings?
- Q. Which lessons only happen once a week?

Say that Rebecca has a favourite day at school and that she has written clues to help you work out which day it is. Read through the clues together.

- Q. Which clues help us to eliminate certain days?
- Q. Which clues help us to eliminate more than one day?
- Q. What happens when we put these clues together?
- Q. Are there any useless clues?



Allow enough time for children to talk about their ideas as they work through the problem.

Agree that the first clue is unhelpful as maths is on the timetable every day. Work through the problem together, crossing out days as they are eliminated by clues. Agree that Rebecca's favourite day is Wednesday. Check through each clue to make sure.

Give out Resource sheet 2. Explain that the children will work in groups of four.

Each person in the group will have a different clue which they cannot show to the rest of their group, but can read as many times as needed and others can ask them questions about their clue.

Give each group a set of clue cards from Resource sheet 3. Ask children to work in their groups to find Sam's favourite day.

One member of the group could be responsible for recording and editing the solution as they work through, but only with the agreement of the whole group.



While children are engaged in this activity, listen for their reasoning and their ability to ask each other questions to clarify information.

Drawing together

- Q. How is your group managing to keep track of the possible activities that fit the clues?

Remind children about the previous lesson, about how one piece of information affects another, and the need to re-check that the choices still fit all of the criteria so far.

- Q. How does another clue help you cross off some of your choices?

Ask the children if they could order the clues to see if they could solve the problem more quickly, putting the key information first.



How is the problem-solving process supported by the collaborative work and limiting the number of children recording the possible solutions?

- Q. Which clue or clues gave you a good place to start?
- Q. What does a 'key' clue do?

Establish that these clues give a good starting point or reduce the number of possible choices.

Using the same timetable ask the children to rearrange or change Sam's favourite day.

They should then write three or four clues so that someone else could find Sam's favourite day.

Remind the children to 'try it out' to check that their clues work.

- Q.** Can you think of a 'Sam does not . . . ' clue that gives useful information?
- Q.** Can you think of a 'key' clue?
- Q.** If you use your clues in a different order, how does it change how quickly you can solve the problem?

Plenary

Select and record, on a board, examples of a group's clue statements.

Use these to develop children's evaluation of each other's work by getting them to try out each other's clues and asking questions such as:

- Q.** How helpful is this clue?
- Q.** Does it work?
- Q.** Is this a good clue for helping us to solve the problem?
- Q.** Why is that so?
- Q.** Could you change it to make it better?
- Q.** How would you do that?
- Q.** What difference does this make to the problem?

Year 3, Lesson 2: resource sheet 1

Rebecca's favourite school day

Monday	Maths	Literacy	Lunchtime	Science	ICT in the ICT room
Tuesday	Science	Literacy		Maths	Art
Wednesday	Literacy	Maths		Swimming	History
Thursday	RE	PE		Literacy	Music
Friday	Literacy	Maths		Geography in Mr Singh's room	PE

Rebecca's clues


- ◆ Maths is her favourite subject.
- ◆ She prefers to do maths in the morning.
- ◆ She doesn't like PE other than swimming.
- ◆ She prefers to be in her own classroom at the end of the day.

Year 3, Lesson 2: resource sheet 2


Monday	Maths	Literacy	Lunchtime		Science	ICT in the ICT room
Tuesday	Science	Literacy			Maths	Art
Wednesday	Literacy	Maths			Swimming	History
Thursday	RE	Maths			Literacy	Music
Friday	Literacy	Maths			Geography in Mr Singh's room	PE

Year 3, Lesson 2: resource sheet 3


One copy for each group




Sam likes maths after literacy.




Sam likes maths before lunchtime.



Sam enjoys PE.



Sam doesn't like to always work in his classroom.



Year 4

Lesson 1: Shape puzzle

Primary Framework objectives

- Identify and use patterns, relationships and properties of numbers or shapes; investigate a statement involving numbers and test it with examples.
- Suggest a line of enquiry and the strategy needed to follow it; collect, organise and interpret selected information to find answers.

By the end of this lesson, children will be able to:

- solve a problem by identifying and prioritising given facts and information;
- use what they know about the structure of a problem to create one of their own.

Vocabulary

sum add total row column double halve

Necessary prior knowledge

- Add and subtract mentally.
- Recognise the use of a symbol to stand for an unknown number.

Resources

- Resource sheet 1
- Resource sheet 2.

Shape puzzle

Each shape stands for a number.

The numbers shown are the totals of the numbers in the row or column.

▲	♣	▲	●	<input type="text"/>
♣	●	♣	▲	25
●	●	●	●	20
▲	♣	♣	▲	<input type="text"/>
<input type="text"/>	<input type="text"/>	<input type="text"/>	26	

Find the totals of the remaining rows and columns.

Main teaching activity

Display the shape puzzle and explain that each of the three shapes represents a different number. Alternatively, you could use a spreadsheet to create a 4×4 grid of numbers covered by shapes, entering the sum of each row and column at the ends. Hiding the formula bar and writing the numbers in white will prevent the children from seeing what you have entered. Say that each row and column has a particular total. Ask children to discuss in pairs which three totals it would be useful to know and why.



The aim here is to focus the children on the important information.

- Q. If the total of the third row was 12 what would you work out?
- Q. If the total of the fourth column was 16 what would you work out? How?

Write $\bullet + \bullet + \bullet + \bullet = 12$

$$\bullet = 3$$

$$\bullet + \blacktriangle + \bullet + \blacktriangle = 16$$

$$3 + \blacktriangle + 3 + \blacktriangle = 16$$

$$\text{so } \blacktriangle + \blacktriangle = 10$$

$$\text{so } \blacktriangle = 5$$

Give out Resource sheet 2 which shows the totals of some of the rows and columns.

- Q. Are these three totals helpful?
- Q. Do you have enough information to solve this problem?

Ask children to work in pairs to solve the problem on Resource sheet 2. Suggest that they record number sentences if they find it helpful.



While children are working, look for examples that show different ways of recording to use as exemplification later.

Drawing together

- Q. What are the values of \blacktriangle , \bullet and \clubsuit ? (8, 5 and 6). Ask the children to write totals of each row and column on the IWB grid.
- Q. How did you solve the problem?
- Q. Which was the most important row or column?
- Q. Why was it the most important?



Which children can explain their reasoning?

Establish that the row with four circles was the most important because the total was given and there was only one type of shape.

- Q. What calculation did you have to do to establish what \bullet was?

Agree that they needed to divide 20 by 4.

- Q. Which column or row did you do next? Why?

Establish that the fourth column, which contained two circles and two triangles, was the next column to prioritise.

Q. What calculations did you do to find out the value of ▲?

Ask the children to show their recording.

Q. How did your recording help?

Suggest that recording can help to make the problem clearer.

Q. What did you do next?

Q. Why were you now able to solve the whole problem?

Q. How many pieces of information were you given at the start of the problem?

Q. What information was it?

Establish that in order to solve the problem the following information was used:

- a total given for one whole row or column which had identical shapes;
- a total given for one row or column which had only two shapes, one of which could be found from above;
- a total given for a row or column that contained the third shape.



Children will need to have a good understanding of these rules before they can create their own puzzles.

Ask the children to make a shape puzzle for a friend to solve, using a 3×3 grid and three different shapes.

Q. What is the smallest number of totals that you can give a friend so that they can solve your puzzle?



While the children are working, look for examples that have tried to give limited information. These can be used in the plenary.

Plenary



The plenary will provide a valuable opportunity for children to evaluate each other's puzzles and to generalise their strategies by looking at several examples. It may be useful to allow more time for the plenary than normal.

Q. Has anyone created a puzzle that only provides one or two totals? Why do you think this wasn't possible?

Agree that it is not possible to solve a problem with three shapes without three pieces of information. Display a shape puzzle that one child has created. Solve the puzzle together.

Q. How many pieces of information did we have?

Q. Which was the most important?

Q. Could we solve the problem if we took one piece of information away?

Choose a child's puzzle with more than three totals (or add a total to one with only three).

Q. Do we need all of these totals? Which are the most important? Even if we don't need more than three totals, how could you use the extra one(s)? Agree that they could be used for checking.

Reflect on the way the problems were solved.

Q. Did we just start at the top and work our way down? Why not?

















Establish the need to identify and prioritise information to solve a problem.

Set homework task: Make a shape puzzle for a friend to solve, use a 4×4 grid and three different shapes.
What is the smallest number of totals that you can give a friend so that they can solve your puzzle?

Year 4, Lesson 1: resource sheet 1

Shape puzzle

Each shape stands for a number.

















			
			
			
			

Year 4, Lesson: resource sheet 2

Shape puzzle

Each shape stands for a number.

The numbers shown are the totals of the numbers in the row or column.

				<input type="text"/>
				25
				20
				<input type="text"/>
<input type="text"/>	<input type="text"/>	<input type="text"/>	26	

Find the totals of the remaining rows and columns.

Year 4

Lesson 2: Numbers of boys and girls

Primary Framework objectives

- Identify and use patterns, relationships and properties of numbers or shapes; investigate a statement involving numbers and test it with examples.
- Suggest a line of enquiry and the strategy needed to follow it; collect, organise and interpret selected information to find answers.

By the end of this lesson, children will be able to:

- solve a problem by checking possible solutions against given criteria;
- solve a problem by identifying and prioritising given facts and information.

Vocabulary

sum row double total add column halve

Necessary prior knowledge

- Add and subtract mentally.
- Add and subtract using informal paper and pencil procedures.

Resources

- Resource sheet 1
- Resource sheet 2
- Resource sheet 3
- Mini-whiteboards.

Numbers of boys and girls

Use these clues to find the number of boys and girls in each class.

There are a total of 114 children in the school.

There are 14 girls in class 2.

Class 4 has twice as many girls as class 2.

No class has the same number of children.

There are 52 boys in the school in total.

In class 1 there are half as many boys as in class 2.

In class 2 there are a total of 30 children.

In class 3 there are an equal number of girls and boys.

In class 4 there are 10 boys.

There are a different number of boys and girls in the school.

Main teaching activity

Display the 'Lunches in Year 4' grid that shows the number of packed lunches and school dinners eaten by a class during one week.

Ask a range of questions about the table, with children working in pairs and responding on individual whiteboards.



Which children can explain their reasoning?

- Q. How many children ate a school dinner on Tuesday?
- Q. How many children ate a packed lunch? How do you know? (Show how to record this as $17 + \square = 30$)



The purpose of the activity is to ensure that children can read information from a table so that they are able to enter data in their own table later in the lesson and use this to work out the missing information.

- Q. How many children ate lunch on Monday?
- Q. What was the total number of school dinners eaten over the week? What do you need to work out first?

Give out Resource sheet 2 and read through the problem with the class.

Explain that they are going to solve the problem by working as a group and that they will be having a set of clue cards to help them.

Split the class into mixed-ability groups of six. Each group will need an enlarged copy of the blank table (Activity sheet 2) and a set of 10 clue cards (from Resource sheet 3). Each group must choose a scribe who will enter the information onto the table. The other five children should each have two clue cards that they need to read to the group. The group needs to decide what to do with each clue card.

Drawing together

Remind the children of the shape puzzle that they solved in the previous lesson. To solve the problem they needed to prioritise information and see how one piece of information affected another.



Give the groups time to make a start on the problem before drawing them together for a mini-plenary.

- Q. In this problem, which clues are the most useful? Why?

Establish that some clues enable children to put information directly into the table without needing any other clues or doing any calculations.

- Q. Which clue is least useful?

Agree that 'there are different numbers of boys and girls in the school' is the least useful and is only helpful as a check.

- Q. Have you been able to put the clues into any order?
- Q. How does one piece of information in a clue help you identify other facts?

Allow the groups to continue to solve the problem.



How is the collaborative group work helping particular children?

Plenary

Complete the table as a class on a blank copy of the grid.

- Q.** Which information can we put in first?
 - Q.** Is there any part of the table that we can complete now?
 - Q.** We know that there are 30 children in class 2 and 14 of them are girls, so how many boys are there in class 2? What calculation did you need to do? Did anyone use recording to make this clear?
- Draw out: $14 + \square = 30$



Give the opportunity for children to explain their reasoning to the class. They will have been able to rehearse this in their groups and so should be more confident in their explanations.

- Q.** Which clue can we use next?

Continue to ask children to help you to work through the problem, encouraging them to explain how one clue and piece of information affects other information.

Once the table has been completed ask questions to encourage children to solve 'what if ...?' problems and to create their own.

- Q.** If three girls joined class 2, which clues would be changed?
- Q.** If five boys join class 3, which clues would need to be altered?
- Q.** What clues could you create instead?

Point out that one piece of information often affects others in this type of problem, and that the shape puzzle and this word problem are quite similar. In each case, we need to prioritise clues/information rather than trying to work through them in order.

Year 4, Lesson 2: resource sheet 1

Lunches in Year 4

	Mon	Tues	Wed	Thurs	Fri
Packed lunch	14		20	14	
School dinner	16	17			10
Total		30	29	27	30

Year 4, Lesson 2: resource sheet 2

A group of children are doing some data handling and they need to find out how many boys and girls there are in each class. They have asked 10 different people who did not know all of the answers but did give them some pieces of information. Can you help the group complete the table using the clues they have?

Numbers of boys and girls

	Class 1	Class 2	Class 3	Class 4	Total
Girls					
Boys					
Total					

Year 4, Lesson 2: resource sheet 3

Numbers of boys and girls

Use these clues to find the number of boys and girls in each class.

There are a total of 114 children in the school.

There are 14 girls in class 2.

Class 4 has twice as many girls as class 2.

No class has the same number of children.

There are 52 boys in the school in total.

In class 1 there are half as many boys as in class 2.

In class 2 there are a total of 30 children.

In class 3 there are an equal number of girls and boys.

In class 4 there are 10 boys.

There are a different number of boys and girls in the school.

Year 5

Lesson 1: Nicknames

Primary Framework objectives

- Explore patterns, properties and relationships and propose a general statement involving numbers or shapes; identify examples for which the statement is true or false.
- Plan and pursue an enquiry; present evidence by collecting, organising and interpreting information; suggest extensions to the enquiry.

By the end of this lesson, children will be able to:

- use one piece of information in the problem and see what effect it has;
- use a recording system to organise the given information;
- check that the answer meets the criteria.

Vocabulary

prioritise relationships table

Necessary prior knowledge


- Experience of checking a solution against the criteria.
- Experience of asking questions to clarify the problem.
- Understanding how one piece of information affects another in the problem.

Resources

- Resource sheet 1
- Resource sheet 2
- Mini-whiteboards.

Nicknames

Dawn, Mark, Josh and Tina are friends.



They each have a nickname.
Their nicknames are Spider, Curly, Ace and Fudgy,
but not in that order.

What is the nickname of each of the friends?

Clues

- ◆ Josh plays tennis with Curly and goes swimming with Ace.
- ◆ Tina has been on holiday with Curly but travels to school with Fudgy.
- ◆ Spider, Curly and Dawn play in the football team.
- ◆ Spider sometimes goes to tea with Josh.

Main teaching activity

Display the Nicknames problem to the class and read through the information given.

Check that children understand what the problem is asking them to do, that is to match the nicknames to the children.

Ask four children to come to the front and give them each a whiteboard. Ask them to each write one of the four children's names on the whiteboards and the four children's nicknames. Say that we will cross out nicknames on the whiteboards as we work out the clues.

Q. What does each statement tell us about the nicknames?



To develop children's thinking it may be necessary to encourage them to think about the 'not' elements that are implicit in the positive language of the statements, that is 'Josh plays tennis with Curly and goes out swimming with Ace', therefore Josh cannot have either of those two names as a nickname.

Statement 1 – we know that Josh cannot have the nickname Curly or Ace.

Statement 2 – we know that Tina cannot have the nickname Curly or Fudgy.

Statement 3 – we know that Dawn cannot have the nickname Spider or Curly.

Statement 4 – we know that Josh cannot have the nickname Spider.

Q. Which child do we have most information about?

Agree that we know most about Josh. Ask children to discuss in pairs what nickname he could have. Agree that the first statement tells us that Josh's nickname is not Curly or Ace, so we can cross these out. The last statement tells us that his nickname is not Spider, so we can cross out Spider. These clues together tell us that his nickname is Fudgy.

Ask children to look at the other clues and choose another child about whom we have quite a bit of information.

Continue working through the clues until only one nickname remains on each board. For example, the third statement tells us that Dawn cannot be Spider or Curly; as Josh is Fudgy, she must be Ace.

Check the solution against the criteria. (Dawn is Ace, Mark is Curly, Josh is Fudgy and Tina is Spider.)

Q. How else could we organise and record the information?

Ask children to discuss this in pairs and to use their whiteboards to show their suggestions.



Look for the children who are recording the information systematically, e.g. in a table, or look for different ways of working to use as exemplification.

Ask children to share some of their suggestions for recording and organising the information. Emphasise the systematic examples that you might have identified in your observations around the class.

If no one has used a table, demonstrate how you could use one to organise the information. Draw the following grid. Discuss and question the children about how you would organise the information that you have.

	Spider	Curly	Ace	Fudgy
Josh	X	X	X	✓
Tina				
Dawn				
Mark				

Share your thinking with the children as you insert the X and ✓.

Explain that they will have the chance to use the idea of a table in a similar problem to see if they find it helpful.

You may wish to give a prepared table to some children.

	Tuna	Salad	Cheese	Chicken
Jenny				
Sarah				
Ranjit				
Paul				

Give out Resource sheet 2.

Q. Which clues do you think would be good to use as a starting point for this problem?

Ask children to work in pairs to solve the problem and suggest they draw a table to help them.



Giving a similar problem should give children an opportunity to put into practice what they have learned. Are they prioritising the criteria? Are they looking at the effect of one clue on another? Do they check their solutions against all the clues?

Plenary

Agree the solution: Jenny chose salad, Sarah chose chicken, Ranjit chose cheese and Paul chose tuna.

Ask children to share how they solved the problem.

Q. Which clues did you work with first? Why?

Q. Which child did you not have any clues for? Did this matter? Why not?

Agree that although we had no clues about Paul, tuna was the only filling left.

Q. Did you find the table useful?

Suggest that some form of organised recording helps us to keep track of our thoughts.

Q. What advice would you give someone else who was trying to solve a similar problem?

Draw out prioritising information, looking at the effect of one clue on another, using a recording system and checking the solution against all the clues.




It is important that children recognise that the strategies they used to solve this problem can be used to solve other problems.

Year 5, Lesson 1: resource sheet 1

Nicknames

Dawn, Mark, Josh and Tina are friends.



They each have a nickname.
Their nicknames are Spider, Curly, Ace and Fudgy,
but not in that order.

What is the nickname of each of the friends?

Clues

- ◆ Josh plays tennis with Curly and goes swimming with Ace.
- ◆ Tina has been on holiday with Curly but travels to school with Fudgy.
- ◆ Spider, Curly and Dawn play in the football team.
- ◆ Spider sometimes goes to tea with Josh.

(from page 57 of Mathematical challenges for able pupils in Key Stages 1 and 2.
Ref. DfEE 0083/2000; NNS publication)

Year 5, Lesson 1: resource sheet 2

Sarah, Jenny, Ranjit and Paul each choose a sandwich filling. They can choose from:

- ◆ tuna,
- ◆ salad,
- ◆ cheese, or
- ◆ chicken.

Each child chooses a different filling.

Clues

- ◆ Sarah doesn't like fish.
- ◆ Jenny cannot eat dairy products.
- ◆ Ranjit does not eat meat or fish.
- ◆ Jenny doesn't like tuna or chicken.

Which sandwich filling does each child choose?

Year 5

Lesson 2: Tea for two

Primary Framework objectives

- Explore patterns, properties and relationships and propose a general statement involving numbers or shapes; identify examples for which the statement is true or false.
- Plan and pursue an enquiry; present evidence by collecting, organising and interpreting information; suggest extensions to the enquiry.

By the end of this lesson, children will be able to:

- use one piece of information in the problem and see what effect it has;
- choose and use a recording system to organise the given information independently;
- check that the answer meets the criteria;
- use appropriate language that is associated with this type of logic problem, e.g. 'If this ... then this will change ...'.

Vocabulary

prioritise relationships

Necessary prior knowledge

- Experience of checking a solution against the criteria.
- Experience of asking questions to clarify the problem.
- Understanding how one piece of information affects another in the problem.

Resources

- Resource sheet 1
- Resource sheet 2
- Resource sheet 3, cut up.

Tea for two

Sally, Amy, Sita and Philippa plan to meet for lunch, but they have not been able to all meet on the same day.

Sally is unable to meet on Tuesdays, Wednesdays or Saturdays.

Amy is free to meet on Mondays, Wednesdays and Thursdays.

Sita has to go to work on Mondays and Thursdays.

Philippa can be available on Mondays, Tuesdays and Fridays.

They all want to spend time at home on Sundays.

Can each pair find a day on which to meet for tea?
Are there any days when none of them can meet?
Are there any days when more than one pair can meet up?

Main teaching activity

Remind children about the lesson 'Nicknames'. In that lesson the focus was about organising and prioritising the information and trying to record it in a way that could exemplify our reasoning and thinking.

Introduce the new problem 'Tea for two'. Ask the children to read the problem. Ask them to discuss the problems in pairs, using the following questions as prompts.

- Q.** What is similar or different about this problem?
- Q.** What strategies will you use to start this problem?

It would be helpful to display the key strategies that the children summarised in the plenary of lesson 1 to support some of them.



The aim of this part of the lesson is for children to be working more independently in order to interpret the statements, prioritise them and begin to create a recording system that will demonstrate their thinking about the information.

Drawing together

Share children's ideas about this problem.

Check that children understand what the problem is asking them to do, that is find out which days the people can meet for tea.

Explain to children that they are going to think about this problem collaboratively. The group will need to have a set of the statements on separate pieces of paper that can be distributed around the group (prepared from Resource sheet 3). Each person needs to interpret their statement and reveal to the group what they think it is telling them. The group should then begin to decide what they could do to solve the problem, including what recording they might use. Ask children to begin work on the problem.

Drawing together

Ask groups to describe their approaches to organising themselves and recording the criteria. This opportunity for sharing could be developed by asking a member of each group to move to another group to describe and discuss their group's recording methods. For example, they may have taken one clue each, or the role of one of the characters.



The sharing of the recording approaches can help children to refine their own ideas and see examples of more efficient recording methods.

- Q.** What form of recording have you decided to use?

Emphasise the systematic examples that you might have identified in your observations around the class. Draw out that a table might be useful.



A two-way table, in which information can be read across rows and down columns, is useful in the approach to this kind of problem.

- Q.** How does the table help to organise the information?
- Q.** What are you going to record on the table?

Agree that it would be useful to record which days each person is free to meet. Warn the children to be careful as some of the clues say which days someone is **not** available.

Q. When you have recorded who is free on which day, what will you need to do next to answer the question?

Agree that they need to list each pair.

Q. How might you do this systematically?

Ask children to discuss this in pairs. Draw out that they could list the pairs involving Sally, then Amy (excluding Sally who has already been listed), then Sita (excluding Sally and Amy). Ensure that the children understand they must not list repeats. (The six possibilities are: Sally and Amy, Sally and Sita, Sally and Philippa, Amy and Sita, Amy and Philippa, Sita and Philippa.)

Ask children to continue to solve the problem.

Plenary

Ask a group to record the days the friends can meet on the displayed grid.

	Mon	Tues	Weds	Thurs	Fri	Sat	Sun
Sally	✓	✗	✗	✓	✓	✗	✗
Amy	✓	✗	✓	✓	✗	✗	✗
Sita	✗	✓	✓	✗	✓	✓	✗
Philippa	✓	✓	✗	✗	✓	✗	✗



Do the children understand that the table is the translation of the word form of the problem to its pictorial representation?

Q. Can we answer the problem questions from this table?

Agree that further work needed to be done.

Q. How did you record the pairs?

Ask one group to show their recording in a table.

For example:

Pair	Days they both can meet
Sally and Amy	Mon, Thurs
Sally and Sita	Fri
Sally and Philippa	Mon, Fri
Amy and Sita	Wed
Amy and Philippa	Mon
Sita and Philippa	Tues, Fri

Say that each pair can find a day to meet, and sometimes three can meet. For example, Sally and Amy could meet with Philippa on Monday.

Q. Is there a day when all four can meet?

Agree that there isn't.

Q. Is there a day when no pairs can meet?

Agree that no one could meet on Sunday and only Sita could meet on Saturday, so no one could meet at the weekend.

Q. How did the recording help?

Agree that it helped us keep track of the information and put the information together. Suggest that tables are often useful if there is too much information to keep in our heads. Logic problems often have a list of statements which we need to put together and tables help us to do this. These clues are a combination of positive and negative statements.

Year 5, Lesson 2: resource sheet 1

Tea for two

Sally, Amy, Sita and Philippa plan to meet for lunch, but they have not been able to all meet on the same day.

Sally is unable to meet on Tuesdays, Wednesdays or Saturdays.

Amy is free to meet on Mondays, Wednesdays and Thursdays.

Sita has to go to work on Mondays and Thursdays.

Philippa can be available on Mondays, Tuesdays and Fridays.

They all want to spend time at home on Sundays.

Can each pair find a day on which to meet for tea?

Are there any days when none of them can meet?

Are there any days when more than one pair can meet up?

Year 5, Lesson 2: resource sheet 2

	Monday	Tuesday	Wednesday	Thursday	Friday	Saturday	Sunday
Sally							
Amy							
Sita							
Philippa							

Year 5, Lesson 2: resource sheet 3

----- ✂ -----

**Sally is unable to meet on Tuesdays,
Wednesdays or Saturdays.**

----- ✂ -----

**Amy is free to meet on Mondays,
Wednesdays and Thursdays.**

----- ✂ -----

**Sita has to go to work on Mondays
and Thursdays.**

----- ✂ -----

**Philippa can be available on Mondays,
Tuesdays and Fridays.**

----- ✂ -----

**They all want to spend time at home
on Sundays.**

----- ✂ -----

Year 6

Lesson 1: Albert Square

Primary Framework objectives

- Represent and interpret sequences, patterns and relationships involving numbers and shapes; suggest and test hypotheses; construct and use simple expressions and formulae in words then symbols (e.g. the cost of c pens at 15 pence each is $15c$ pence).
- Suggest, plan and develop lines of enquiry; collect, organise and represent information, interpret results and review methods; identify and answer related questions.

By the end of this lesson, children will be able to:

- prioritise and use given facts to solve and check logic problems;
- ask 'What if ...?' questions.

Vocabulary

prioritise relationships

Necessary prior knowledge

- Add several small numbers mentally.

Resources

- Resource sheet 1
- Resource sheet 2
- Resource sheet 3.

Albert Square



In Albert Square no house has the same number of people living in it as another.
The houses are different sizes.
In each line of three houses there are a total of 15 people.
Altogether 36 people live in the eight houses.
No house is empty.

How many people live in each house?

Main teaching activity

Share the Albert Square problem with the children and explain that the focus of the lesson will be to look at how we solve this type of problem. Identify that this is one of a category of problems called logic problems. Say that one definition of logic problems is those where we use the relationships between criteria to reach a solution. It would be helpful to provide pupils with other examples of logic problems they have solved to draw out the similarities between logic problems.

Explain that, by the end of the lesson, as well as solving the given problem we will reflect on the steps we took to solve the problem so that we can apply them to other problems.

Ask children to work in pairs to begin to identify what they need to find out and what information might be useful from the given facts. Children should be encouraged to eliminate the redundant information.

Drawing together

Use feedback from children to ensure that they have all focused on the given criteria. They should be clear about what we have to find out and that the answer has to meet a range of criteria.



The teaching sequence follows the outline below, which will be used to help the development of the toolkit in the plenary.

- What do we have to find out?
- Decide where to start.
- Decide how we are going to solve the problem.
- Review work – where are we, where do we need to be?
- Check that the answer meets all the criteria.

Give a selection of incorrect possible solutions for children to discuss in pairs to check their understanding of the need to consider all the criteria.

34	15	36
17		20
19	40	41

Q. Is this a valid solution?

Draw out that it meets one criterion but not the others. (The numbers are all different but the total is greater than 36 and the row totals are greater than 15.)

2	10	3
4		7
9	1	5

Q. Is this a valid solution?

Draw out that it meets two criteria but not the other one. (The numbers are all different, the rows total 15 but the overall total is greater than 36.)

1	12	2
5		8
9	1	5

Q. Is this a valid solution?

Draw out that it meets one criterion but not the others. (The rows total 15 but the overall total is greater than 36 and the numbers are not all different.)



This part of the lesson is trying to move children on from using a trial and improvement approach and towards working through logic problems by systematically looking at the criteria given.

Use the last example and share your thinking out loud. For example, 'If I change the blue 5 (see above) to a 4, what effect does this have? Oh, I have to make one other in the row bigger because this is smaller, but that has changed column C ...'

Agree that this approach would take a long time because it is not an efficient way of working. Remind children of other logic problems that they have solved and clarify that some information in the problem is more important and helpful to use as a starting point.

Ask children to discuss how we might record criteria together with the grid.

Agree that the following could be helpful.

				Totals for each row
				15
				15
Totals for each column	15	15	36	Totals for all people



Sometimes recording the information can make the problem clearer.

Having recorded what we know, ask if we can now work out any other information. Ask children to discuss this in pairs. Agree that, as there are 36 people altogether and 30 living in two rows (or columns), the remaining row must have a total of 6, as must the remaining column. Record this on the grid.

Ask children to discuss which columns or rows it might be best to start with. Agree that finding the pairs with a total of 6 will give fewer possibilities than trios with a total of 15. Remind them that no house should have the same number of people, and ask them to continue to work on the problem in pairs.

Using a spreadsheet facility or digit cards will save the children from having to make lots of recordings or having to continually rub out their attempts.

Drawing together

After the children have had an opportunity to make a good start on the problem, draw them together to share strategies.

- Q.** Which numbers did you position first?
- Q.** Which total was easier to find? (6)
- Q.** Why was this total easier to find?
 (We are only combining two numbers to make this total.)
- Q.** How did you make this total? ($5 + 1$ and $2 + 4$)

Ask a child to enter the four numbers which total 6.

- Q.** What did you do next?

	1		15
2		4	6
	5		15
			36

- Q.** What numbers combine with 1 to make the top row total 15? Ask the children to list systematically: 1 and 13, 2 and 12, 3 and 11, 4 and 10, 5 and 9, 6 and 8, 7 and 7.

- Q.** Which of these can we not use? Why?

Cross out 1 and 13, 2 and 12, 4 and 10, 7 and 7 (repeated numbers). Put 11 in the top left square.

- Q.** What effect does this have on other numbers in the grid?

Discuss that as $11 + 2 = 13$, the bottom left number would be 2, a repeat, so 11 can't be placed here. Ask the children to discuss in pairs if it could be placed in the top right square, and then go on to discuss which number rows are possible to try to solve the problem.

- Q.** Does your grid meet the original criteria in the question?
 (The solution is on Resource sheet 3.)



Encourage children to go back to the question to check that their solution meets all the criteria.

Plenary

Ask neighbouring pairs of children to discuss their solutions and to discuss whether they are different. They will find that their solutions are rotations or reflections of each other.

Point out that, although we now know the number of people living in the eight houses and the relationship between them, there are several possibilities for the top left house, for example. Agree on one solution and ask children to think of additional clues which would distinguish this particular solution from the others, e.g. the first house has the most people living in it.

Help children to reflect on how they solved this type of problem by identifying the facts and prioritising them to find new information.



It may be helpful to display this for future lessons, incorporating different examples of work to exemplify the steps.

Reflect on the steps they have worked through:

1. What do we have to find out?
2. Decide where to start.
3. Decide how we are going to solve the problem, including how recording might help us.
4. Review work: Where are we? Where do we need to be? Is this working?
5. Check that the answer meets all the criteria.

Year 6, Lesson 1: resource sheet 1

Albert Square



In Albert Square no house has the same number of people living in it as another.

The houses are different sizes.

In each line of three houses there are a total of 15 people.

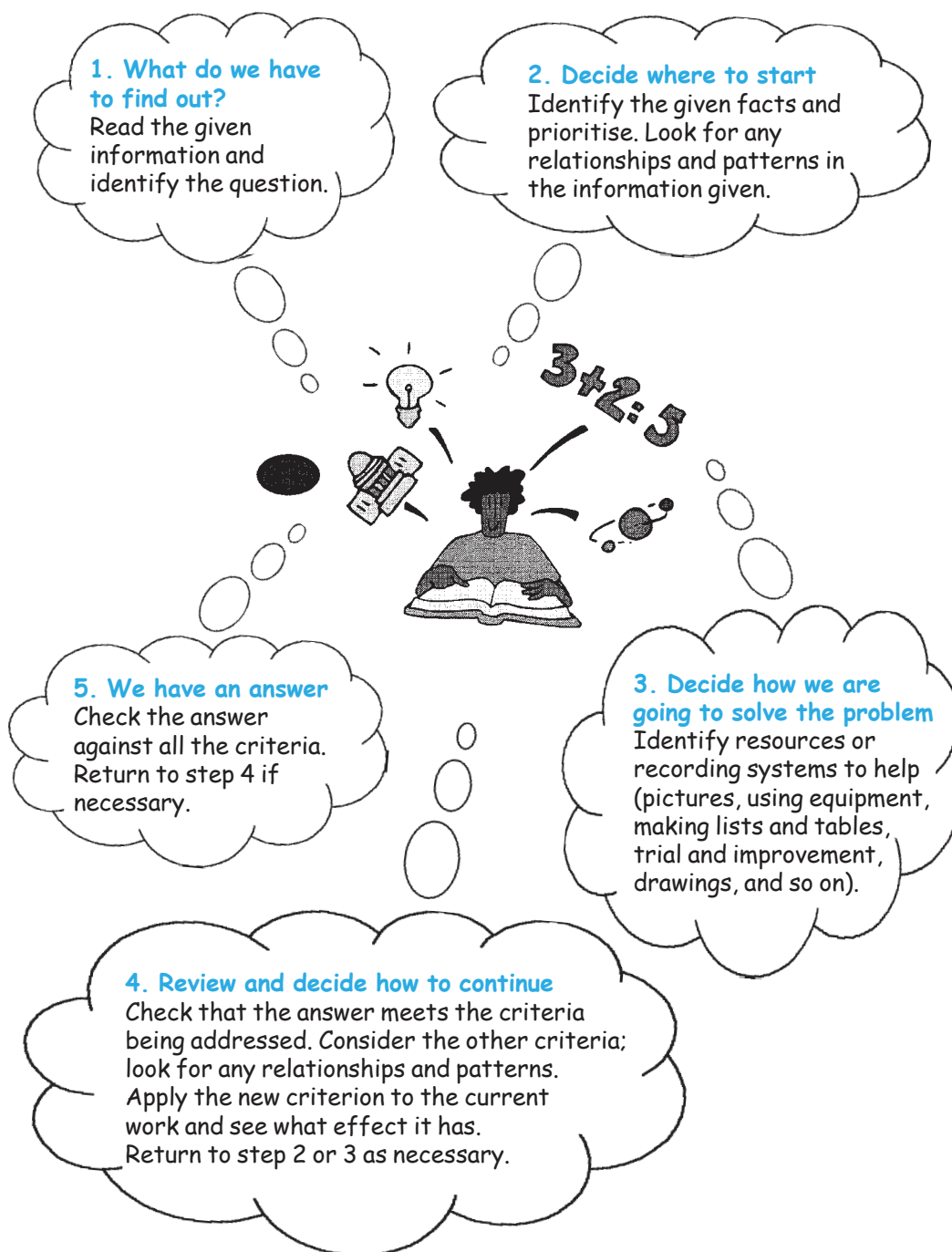
Altogether 36 people live in the eight houses.

No house is empty.

How many people live in each house?

Year 6, Lesson 1: resource sheet 2

Steps to solve the problem



Year 6, Lesson 1: resource sheet 3

The solution

6	1	8
2		4
7	5	3

- ◆ Identify the numbers to position in the grid using the information that there are 8 different numbers and the total is 36.
- ◆ Use the criteria that the rows and columns each total 15, and the overall total = 36, to identify that the middle rows and columns each total 6.

a	b	c	= 15
d		e	= 6
f	g	h	= 15

36

- ◆ Identify the pairs that total 6 and put them into the grid, e.g.

a	1	c	= 15
2		4	= 6
e	5	g	= 15

- ◆ Use trial and improvement to insert the other numbers into the grid.
- ◆ Explore the other possibilities for inserting the numbers (reflection and rotations of the given example) and identify an additional criterion to limit the number of solutions to one.

Year 6

Lesson 2: House points

Primary Framework objectives

- Represent and interpret sequences, patterns and relationships involving numbers and shapes; suggest and test hypotheses; construct and use simple expressions and formulae in words then symbols (e.g. the cost of c pens at 15 pence each is $15c$ pence).
- Suggest, plan and develop lines of enquiry; collect, organise and represent information, interpret results and review methods; identify and answer related questions.

By the end of this lesson, children will be able to:

- prioritise and use given facts to solve and check logic problems;
- recognise the effect of extensions such as 'What if ...?' questions;
- create their own criteria for solving a logic problem in the context of a solved problem.

Vocabulary

prioritise relationships consecutive

Necessary prior knowledge

- Add several small numbers mentally.
- Children who have experience of magic squares may find this activity easier.

Resources

- Resource sheet 1
- Resource sheet 2 from Lesson 1
- Resource sheet 3.

House points

How many house points did each child in Grey House receive?

Usha	Sally	Tom
Anne	Sanjay	Jeremy
Sue	Bob	Pete

- ◆ At the end of the year the 9 children in Grey House all received some house points.
- ◆ The children's house points are consecutive numbers.
- ◆ The total house points for Grey House was 144 points.
- ◆ Each line of three children received the same total of points.
- ◆ No two children had the same number of house points.
- ◆ All children's house points were two-digit numbers.
- ◆ Jeremy had the least house points and sits in the same line as the girl who received more house points than anyone else.
- ◆ Jeremy did not have the same points as Sanjay.

Main teaching activity

Read the problem on Activity sheet 1 together.

Remind children that logic problems are those where we use the relationships between given pieces of information, criteria, to reach a solution.

Remind children of the steps on Resource sheet 2. This could be a display, or each child could have a copy. Draw children's attention to steps 1 and 2.

1. What do we have to find out? Read the given information and identify the question.

2. Decide where to start.

Ask children to discuss in pairs where they might start with this problem.

After several minutes, draw out that it would be useful to narrow down the range of numbers (from just two-digit numbers).

Q. Which clues can help us do this?

Q. Can the single statement be more easily interpreted using one or more of the other criteria to support it?

Draw out that the following clues will help.

- The total house points for Grey House was 144 points.
- The pupils' house points are consecutive numbers.

Ask children to try and find nine consecutive numbers with a total of 144.

If children are struggling, suggest they find the total of numbers starting at 10 in order to get going, and then modify their start number according to what they find.

Drawing together

Agree that the numbers are 12, 13, 14, 15, 16, 17, 18, 19 and 20. Ask children to discuss in pairs what we might do next. Agree that we need to start placing numbers and ask them to identify clues to help us. Agree that 'Jeremy had the least house points and sits in the same line as the girl who received more house points than anyone else' is a good start. Ask children to discuss how they are going to record their work and then to carry on with the problem.



It's important that children see how a problem can be broken down to make it manageable.

Drawing together

Ask children to share how they decided Jeremy had 12 points and Anne (the only girl in the same line) had 20 points. Some children may need additional guidance to look at the further criteria as there are two stages to work through, using the statement about the total points for each line of pupils and the information about Jeremy.



Has any group got a recording strategy that can be demonstrated to others to lead them to looking at an efficient recording strategy to help them record 'If this . . . then this . . . '?

20	16	12

Q. How do we know how many points Sanjay has? What do we need to know? Can we work this out?

Agree that as each line has the same total, and the total of three lines is 144, each line must have a total of 48 points.

'The only girl in the same line as Jeremy is Anne. Anne must have received the most points.

The line has to total 48. $20 + 12 = 32$, $48 - 32 = 16$, Sanjay must have 16 points.'

Ask children to work in pairs, completing the possibilities using a trial and improvement approach.

Encourage them to consider the effects on other rows of placing numbers, as they did in the previous lesson.

Plenary

Refer children to the last step in solving problems and to check that the answer meets the criteria.

Q. Do we have a final answer?

Ask children to tick each clue (criterion) if the answer fits.

Q. Is there more than one answer?

Encourage children to compare their answers.

Q. What do you notice about the two answers that are possible? Draw out that the top and bottom rows are swapped.

Q. Could we add more criteria to ensure that there is only one answer?

Q. Did you find the steps to solving logic problems useful?

Q. What was the same about the way we solved this problem and the house problem?

Q. What three top tips have you got to share with people about solving logic problems?

Make sure they include:

- prioritising information;
- the effects of one part of the solution on another.

Year 6, Lesson 2: resource sheet 1

House points

How many house points did each child in Grey House receive?

Usha	Sally	Tom
Anne	Sanjay	Jeremy
Sue	Bob	Pete

- ◆ At the end of the year the 9 children in Grey House all received some house points.
- ◆ The children's house points are consecutive numbers.
- ◆ The total house points for Grey House was 144 points.
- ◆ Each line of three children received the same total of points.
- ◆ No two children had the same number of house points.
- ◆ All children's house points were two-digit numbers.
- ◆ Jeremy had the least house points and sits in the same line as the girl who received more house points than anyone else.
- ◆ Jeremy did not have the same points as Sanjay.

Year 6, Lesson 2: resource sheet 2

One solution

Usha
15

Sally
14

Tom
19

Anne
20

Sanjay
16

Jeremy
12

Sue
13

Bob
18

Pete
17

Audience: EYFS, KS1 and KS2 teachers, mathematics
subject leaders, LA mathematics consultants.
Date of issue: 07-2010
Ref: **00433-2010PDF-EN-01**

Copies of this publication may be available from:
<http://publications.education.gov.uk>

You can download this publication and obtain further
information at: **www.standards.dcsf.gov.uk**

© Crown copyright 2010
Published by the Department for Education

Extracts from this document may be reproduced
for non-commercial research, education or training
purposes on the condition that the source is
acknowledged as Crown copyright, the publication
title is specified, it is reproduced accurately and not
used in a misleading context.

**The permission to reproduce Crown copyright
protected material does not extend to any
material in this publication which is identified
as being the copyright of a third party.**

For any other use please contact
licensing@opsi.gov.uk
www.opsi.gov.uk/click-use/index.htm