

Racing team name : .....



### Race 1: Shelsey Walsh

**Start**


Flat for 6 km

Downhill 1:10 for 2 km

Uphill 1:10 for 6 km

Downhill 1:10 for 4 km

Flat for 7 km



### Race 2: Prescott Park

**Start**


Downhill 1:10 for 4 km

Uphill 1:10 for 2 km

Flat for 7 km

Uphill for 4 km

Downhill for 8 km



### Race 3: Loton Park

**Start**


Uphill 1:10 for 0.5 km

Flat for 2.5 km

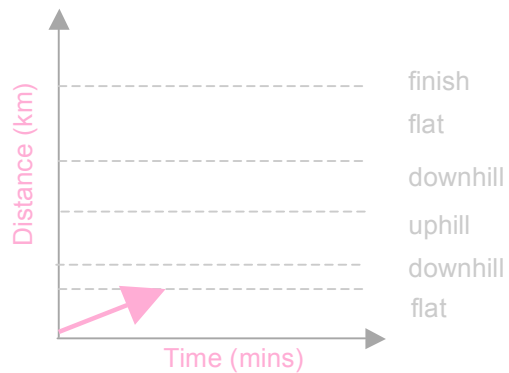
Uphill 1:10 for 4.5 km

Flat for 3.5 km

Uphill for 1.5 km



### Distance time graph



### Our car: Performance

Data from the activity sheet "How fast ...?"

### Speed km/h

Flat .....  
Up slope .....  
Down slope .....

### Activity

Use graph paper to draw distance time graphs for your car competing in the 3 races

**Race your car**

Distance Time graphs